

Review Exercises

See CalcChat.com for tutorial help and worked-out solutions to odd-numbered exercises.

Finding or Evaluating an Integral In Exercises 1–8, use the basic integration rules to find or evaluate the integral.

1. $\int x\sqrt{x^2 - 36} dx$

2. $\int xe^{x^2-1} dx$

3. $\int \frac{x}{x^2 - 49} dx$

4. $\int \frac{x}{\sqrt[3]{4-x^2}} dx$

5. $\int_1^e \frac{\ln(2x)}{x} dx$

6. $\int_{3/2}^2 2x\sqrt{2x-3} dx$

7. $\int \frac{100}{\sqrt{100-x^2}} dx$

8. $\int \frac{2x}{x-3} dx$

Using Integration by Parts In Exercises 9–16, use integration by parts to find the indefinite integral.

9. $\int xe^{3x} dx$

10. $\int x^3e^x dx$

11. $\int e^{2x} \sin 3x dx$

12. $\int x\sqrt{x-1} dx$

13. $\int x^2 \sin 2x dx$

14. $\int \ln\sqrt{x^2-4} dx$

15. $\int x \arcsin 2x dx$

16. $\int \arctan 2x dx$

Finding a Trigonometric Integral In Exercises 17–22, find the trigonometric integral.

17. $\int \cos^3(\pi x - 1) dx$

18. $\int \sin^2 \frac{\pi x}{2} dx$

19. $\int \sec^4 \frac{x}{2} dx$

20. $\int \tan \theta \sec^4 \theta d\theta$

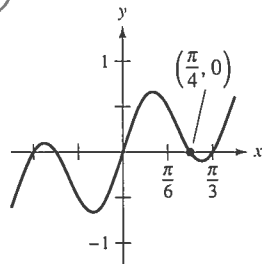
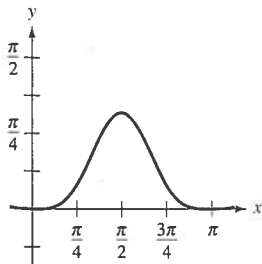
21. $\int \frac{1}{1 - \sin \theta} d\theta$

22. $\int \cos 2\theta(\sin \theta + \cos \theta)^2 d\theta$

Area In Exercises 23 and 24, find the area of the region.

23. $y = \sin^4 x$

24. $y = \sin 3x \cos 2x$



Using Trigonometric Substitution In Exercises 25–30, use trigonometric substitution to find or evaluate the integral.

25. $\int \frac{-12}{x^2\sqrt{4-x^2}} dx$

26. $\int \frac{\sqrt{x^2-9}}{x} dx, x > 3$

27. $\int \frac{x^3}{\sqrt{4+x^2}} dx$

28. $\int \sqrt{25-9x^2} dx$

29. $\int_0^1 \frac{6x^3}{\sqrt{16+x^2}} dx$

30. $\int_3^4 x^3 \sqrt{x^2-9} dx$

Using Different Methods In Exercises 31 and 32, find the indefinite integral using each method.

31. $\int \frac{x^3}{\sqrt{4+x^2}} dx$

(a) Trigonometric substitution

(b) Substitution: $u^2 = 4 + x^2$

(c) Integration by parts: $dv = \frac{x}{\sqrt{4+x^2}} dx$

32. $\int x\sqrt{4+x} dx$

(a) Trigonometric substitution

(b) Substitution: $u^2 = 4 + x$

(c) Substitution: $u = 4 + x$

(d) Integration by parts: $dv = \sqrt{4+x} dx$

Using Partial Fractions In Exercises 33–38, use partial fractions to find the indefinite integral.

33. $\int \frac{x-39}{x^2-x-12} dx$

34. $\int \frac{5x-2}{x^2-x} dx$

35. $\int \frac{x^2+2x}{x^3-x^2+x-1} dx$

36. $\int \frac{4x-2}{3(x-1)^2} dx$

37. $\int \frac{x^2}{x^2+5x-24} dx$

38. $\int \frac{\sec^2 \theta}{\tan \theta(\tan \theta - 1)} d\theta$

Integration by Tables In Exercises 39–46, use integration tables to find or evaluate the integral.

39. $\int \frac{x}{(4+5x)^2} dx$

40. $\int \frac{x}{\sqrt{4+5x}} dx$

41. $\int_0^{\sqrt{\pi/2}} \frac{x}{1+\sin x^2} dx$

42. $\int_0^1 \frac{x}{1+e^{x^2}} dx$

43. $\int \frac{x}{x^2+4x+8} dx$

44. $\int \frac{3}{2x\sqrt{9x^2-1}} dx, x > \frac{1}{3}$

45. $\int \frac{1}{\sin \pi x \cos \pi x} dx$

46. $\int \frac{1}{1+\tan \pi x} dx$

47. **Verifying a Formula** Verify the reduction formula

$$\int (\ln x)^n dx = x(\ln x)^n - n \int (\ln x)^{n-1} dx.$$

48. **Verifying a Formula** Verify the reduction formula

$$\int \tan^n x dx = \frac{1}{n-1} \tan^{n-1} x - \int \tan^{n-2} x dx.$$

Finding an Indefinite Integral In Exercises 49–56, find the indefinite integral using any method.

49. $\int \theta \sin \theta \cos \theta \, d\theta$ 50. $\int \frac{\csc \sqrt{2x}}{\sqrt{x}} \, dx$
 51. $\int \frac{x^{1/4}}{1 + x^{1/2}} \, dx$ 52. $\int \sqrt{1 + \sqrt{x}} \, dx$
 53. $\int \sqrt{1 + \cos x} \, dx$ 54. $\int \frac{3x^3 + 4x}{(x^2 + 1)^2} \, dx$
 55. $\int \cos x \ln(\sin x) \, dx$ 56. $\int (\sin \theta + \cos \theta)^2 \, d\theta$

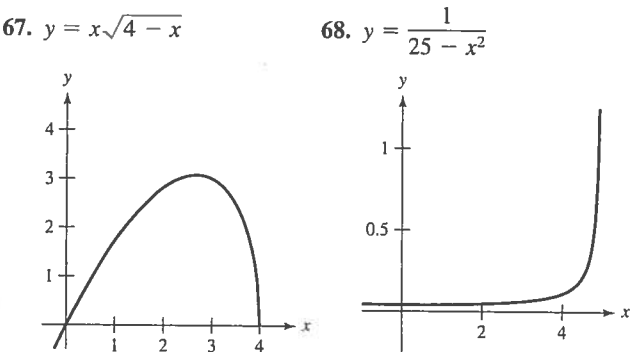
Differential Equation In Exercises 57–60, solve the differential equation using any method.

57. $\frac{dy}{dx} = \frac{25}{x^2 - 25}$ 58. $\frac{dy}{dx} = \frac{\sqrt{4 - x^2}}{2x}$
 59. $y' = \ln(x^2 + x)$ 60. $y' = \sqrt{1 - \cos \theta}$

Evaluating a Definite Integral In Exercises 61–66, evaluate the definite integral using any method. Use a graphing utility to verify your result.

61. $\int_2^{\sqrt{5}} x(x^2 - 4)^{3/2} \, dx$ 62. $\int_0^1 \frac{x}{(x-2)(x-4)} \, dx$
 63. $\int_1^4 \frac{\ln x}{x} \, dx$ 64. $\int_0^2 xe^{3x} \, dx$
 65. $\int_0^\pi x \sin x \, dx$ 66. $\int_0^5 \frac{x}{\sqrt{4+x}} \, dx$

Area In Exercises 67 and 68, find the area of the region.



Centroid In Exercises 69 and 70, find the centroid of the region bounded by the graphs of the equations.

69. $y = \sqrt{1-x^2}$, $y = 0$
 70. $(x-1)^2 + y^2 = 1$, $(x-4)^2 + y^2 = 4$

Arc Length In Exercises 71 and 72, approximate to two decimal places the arc length of the curve over the given interval.

Function	Interval
71. $y = \sin x$	$[0, \pi]$
72. $y = \sin^2 x$	$[0, \pi]$

Evaluating a Limit In Exercises 73–80, use L'Hôpital's Rule to evaluate the limit.

73. $\lim_{x \rightarrow 1} \frac{(\ln x)^2}{x-1}$ 74. $\lim_{x \rightarrow 0} \frac{\sin \pi x}{\sin 5\pi x}$
 75. $\lim_{x \rightarrow \infty} \frac{e^{2x}}{x^2}$ 76. $\lim_{x \rightarrow \infty} xe^{-x^2}$
 77. $\lim_{x \rightarrow \infty} (\ln x)^{2/x}$ 78. $\lim_{x \rightarrow 1^+} (x-1)^{\ln x}$
 79. $\lim_{n \rightarrow \infty} 1000 \left(1 + \frac{0.09}{n}\right)^n$ 80. $\lim_{x \rightarrow 1^+} \left(\frac{2}{\ln x} - \frac{2}{x-1}\right)$

Evaluating an Improper Integral In Exercises 81–88, determine whether the improper integral diverges or converges. Evaluate the integral if it converges.

81. $\int_0^{16} \frac{1}{\sqrt[4]{x}} \, dx$ 82. $\int_0^2 \frac{7}{x-2} \, dx$
 83. $\int_1^\infty x^2 \ln x \, dx$ 84. $\int_0^\infty \frac{e^{-1/x}}{x^2} \, dx$
 85. $\int_1^\infty \frac{\ln x}{x^2} \, dx$ 86. $\int_1^\infty \frac{1}{\sqrt[4]{x}} \, dx$
 87. $\int_2^\infty \frac{1}{x\sqrt{x^2-4}} \, dx$ 88. $\int_0^\infty \frac{2}{\sqrt{x}(x+4)} \, dx$

89. Present Value The board of directors of a corporation is calculating the price to pay for a business that is forecast to yield a continuous flow of profit of \$500,000 per year. The money will earn a nominal rate of 5% per year compounded continuously. What is the present value of the business

- (a) for 20 years?
 (b) forever (in perpetuity)?

(Note: The present value for t_0 years is $\int_0^{t_0} 500,000e^{-0.05t} \, dt$.)

90. Volume Find the volume of the solid generated by revolving the region bounded by the graphs of $y = xe^{-x}$, $y = 0$, and $x = 0$ about the x -axis.

91. Probability The average lengths (from beak to tail) of different species of warblers in the eastern United States are approximately normally distributed with a mean of 12.9 centimeters and a standard deviation of 0.95 centimeter (see figure). The probability that a randomly selected warbler has a length between a and b centimeters is

$$P(a \leq x \leq b) = \frac{1}{0.95 \sqrt{2\pi}} \int_a^b e^{-(x-12.9)^2/1.805} \, dx.$$

Use a graphing utility to approximate the probability that a randomly selected warbler has a length of (a) 13 centimeters or greater and (b) 15 centimeters or greater. (Source: Peterson's Field Guide: Eastern Birds)

