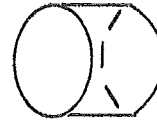


Types of Solids

A solid is a three-dimensional figure. Write the letter of the name of each solid in the space below the figure. Correct answers will reveal a message.

rectangular pyramid—A
 triangular prism—E
 pentagonal prism—L
 triangular pyramid—O
 hexagonal pyramid—R
 sphere—T

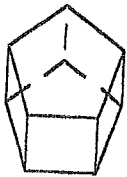
cone—D
 rectangular prism—I
 cube—N
 pentagonal pyramid—P
 cylinder—S



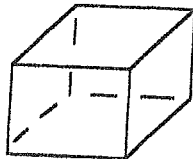
1



2



3



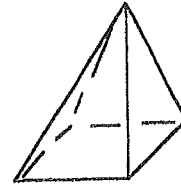
4



5



6



7



8



9



10



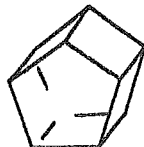
11



12



13



14



15



16



17